



# Question Paper Preview

## Notations :

- 1.Options shown in **green** color and with  icon are correct.
- 2.Options shown in **red** color and with  icon are incorrect.

<b>Subject Name :</b>	Office Executive
<b>Creation Date :</b>	2021-09-09 18:47:17
<b>Duration :</b>	90
<b>Total Marks :</b>	85
<b>Display Marks:</b>	Yes
<b>Share Answer Key With Delivery Engine :</b>	No
<b>Actual Answer Key :</b>	Yes
<b>Calculator :</b>	None
<b>Magnifying Glass Required? :</b>	No
<b>Ruler Required? :</b>	No
<b>Eraser Required? :</b>	No
<b>Scratch Pad Required? :</b>	No
<b>Rough Sketch/Notepad Required? :</b>	No
<b>Protractor Required? :</b>	No
<b>Show Watermark on Console? :</b>	Yes
<b>Highlighter :</b>	No
<b>Auto Save on Console? ( SA type of questions will be always auto saved ) :</b>	No

## Office Executive

**Group Number :** 1

<b>Group Id :</b>	540626791
<b>Group Maximum Duration :</b>	0
<b>Group Minimum Duration :</b>	90
<b>Show Attended Group? :</b>	No
<b>Edit Attended Group? :</b>	No
<b>Break time :</b>	0
<b>Group Marks :</b>	85
<b>Is this Group for Examiner? :</b>	No

## General Awareness

<b>Section Id :</b>	540626998
<b>Section Number :</b>	1
<b>Section type :</b>	Online
<b>Mandatory or Optional :</b>	Mandatory
<b>Number of Questions :</b>	10
<b>Number of Questions to be attempted :</b>	10
<b>Section Marks :</b>	10
<b>Enable Mark as Answered Mark for Review and Clear Response :</b>	Yes
<b>Sub-Section Number :</b>	1
<b>Sub-Section Id :</b>	5406261199
<b>Question Shuffling Allowed :</b>	Yes

**Question Number : 1 Question Id : 54062620008 Question Type : MCQ Option Shuffling : Yes Is Question Mandatory : No Option Orientation : Vertical Correct Marks : 1 Wrong Marks : 0.33**

Which ministry organised 'Gender Samvaad Event 2021', a joint attempt between DAY-NRLM and the Initiative for What Works to Advance Women and Girls in the Economy (IWWAGE) to create a common platform to share experiences emerging from this effort?

**Options :**

1. ✖ Ministry of Health and Family welfare
2. ✖ Ministry of Economic Affairs
3. ✖ Ministry of Finance
4. ✔ Ministry of Rural Development

**Question Number : 2 Question Id : 54062620009 Question Type : MCQ Option Shuffling : Yes Is Question Mandatory : No Option Orientation : Vertical**

**Correct Marks : 1 Wrong Marks : 0.33**

Covaxin, India's indigenous Covid-19 vaccine, is manufactured by:

**Options :**

1. ✖ Sun Pharmaceuticals
2. ✔ Bharat Biotech
3. ✖ Aurobindo Pharma
4. ✖ Serum Institute of India

**Question Number : 3 Question Id : 54062620010 Question Type : MCQ Option Shuffling : Yes Is Question Mandatory : No Option Orientation : Vertical**

**Correct Marks : 1 Wrong Marks : 0.33**

According to the 'Inclusive Internet Index 2021' conducted by Facebook-Economist Intelligence Unit (EIU), India is at the \_\_\_\_\_ spot when it comes to internet inclusion and gender equality in accessing the internet.

**Options :**

1. ✔ 49th
2. ✖ 67th
3. ✖ 14th
4. ✖ 25th

**Question Number : 4 Question Id : 54062620011 Question Type : MCQ Option Shuffling : Yes Is Question Mandatory : No Option Orientation : Vertical**

**Correct Marks : 1 Wrong Marks : 0.33**

Among the following rivers, which one does NOT flow from the Aravali range?

**Options :**

1. ✖ Banas
2. ✖ Luni
3. ✔ Pamba
4. ✖ Sabarmati

**Question Number : 5 Question Id : 54062620012 Question Type : MCQ Option Shuffling : Yes Is**

**Question Mandatory : No Option Orientation : Vertical**

**Correct Marks : 1 Wrong Marks : 0.33**

Which of the following Indian states does NOT share its border with Myanmar?

**Options :**

1. ✖ Arunachal Pradesh
2. ✖ Nagaland
3. ✖ Manipur
4. ✔ Andhra Pradesh

**Question Number : 6 Question Id : 54062620013 Question Type : MCQ Option Shuffling : Yes Is**

**Question Mandatory : No Option Orientation : Vertical**

**Correct Marks : 1 Wrong Marks : 0.33**

The city of CALCUTTA was founded in the year:

**Options :**

1. ✖ 1696
2. ✖ 1692
3. ✖ 1694
4. ✔ 1690

**Question Number : 7 Question Id : 54062620014 Question Type : MCQ Option Shuffling : Yes Is**

**Question Mandatory : No Option Orientation : Vertical**

**Correct Marks : 1 Wrong Marks : 0.33**

Among the Bengali writers who was known as BANAPHUL?

**Options :**

1. ✓ Balai chand Mukhopadhyay
2. ✗ Peary Chand Mitra
3. ✗ Sarat Chandra Chattopadhyay
4. ✗ Bibhutibhushan Bandyopadhyay

**Question Number : 8 Question Id : 54062620015 Question Type : MCQ Option Shuffling : Yes Is**

**Question Mandatory : No Option Orientation : Vertical**

**Correct Marks : 1 Wrong Marks : 0.33**

Which of the following consists the character 'Chand Sadagar'?

**Options :**

1. ✓ Manashamangal
2. ✗ Chandimangal
3. ✗ Kalikapuran
4. ✗ Bishnupuran

**Question Number : 9 Question Id : 54062620016 Question Type : MCQ Option Shuffling : Yes Is**

**Question Mandatory : No Option Orientation : Vertical**

**Correct Marks : 1 Wrong Marks : 0.33**

Please find the odd man out:

**Options :**

1. ✗ Arayanok
2. ✗ Pather Panchanchali
3. ✗ Chander Pahar
4. ✓ Devdas

**Question Number : 10 Question Id : 54062620017 Question Type : MCQ Option Shuffling : Yes**

**Is Question Mandatory : No Option Orientation : Vertical**

**Correct Marks : 1 Wrong Marks : 0.33**

The character Panchak features in the drama:

**Options :**

1. ✓ Achalayatan
2. ✗ Dak Ghar
3. ✗ Rakto Karobi
4. ✗ Tasher Desh

## Reasoning

Section Id :	540626999
Section Number :	2
Section type :	Online
Mandatory or Optional :	Mandatory
Number of Questions :	10
Number of Questions to be attempted :	10
Section Marks :	10
Enable Mark as Answered Mark for Review and Clear Response :	Yes
Sub-Section Number :	1
Sub-Section Id :	5406261200
Question Shuffling Allowed :	Yes

**Question Number : 11 Question Id : 54062620018 Question Type : MCQ Option Shuffling : Yes**  
**Is Question Mandatory : No Option Orientation : Vertical**

**Correct Marks : 1 Wrong Marks : 0.33**

Select the letter-cluster from among the given options that can replace the question mark (?) in the following series.

RGA, TKG, VOM, XSS, ?

**Options :**

1. ✖ WXZ
2. ✖ XWY
3. ✖ YXZ
4. ✔ ZWY

**Question Number : 12 Question Id : 54062620019 Question Type : MCQ Option Shuffling : Yes**  
**Is Question Mandatory : No Option Orientation : Vertical**

**Correct Marks : 1 Wrong Marks : 0.33**

Four pairs of letter-clusters have been given, out of which three are alike in some manner and one is different. Select the one that is different.

**Options :**

1. ✖ DPL : HTP
2. ✔ FKG : JPK
3. ✖ RMC : VQG
4. ✖ HFS : LJW

**Question Number : 13 Question Id : 54062620020 Question Type : MCQ Option Shuffling : Yes**  
**Is Question Mandatory : No Option Orientation : Vertical**

**Correct Marks : 1 Wrong Marks : 0.33**

Select the option that is related to the third word in the same way as the second word is related to the first word.

Beautiful : Pretty :: Funny : ?

**Options :**

1. ✖ Impartial
2. ✔ Hilarious
3. ✖ Sincere
4. ✖ Fragrant

**Question Number : 14 Question Id : 54062620021 Question Type : MCQ Option Shuffling : Yes**

**Is Question Mandatory : No Option Orientation : Vertical**

**Correct Marks : 1 Wrong Marks : 0.33**

In a certain code language, NITIN is coded as PLXNT and VINOD is coded as FRRNB. How will KAPIL be coded as in that language?

**Options :**

1. ✖ MKTEV

2. ✖ LKSFR

3. ✔ NLTFQ

4. ✖ MNSFQ

**Question Number : 15 Question Id : 54062620022 Question Type : MCQ Option Shuffling : Yes**

**Is Question Mandatory : No Option Orientation : Vertical**

**Correct Marks : 1 Wrong Marks : 0.33**

Select the number from among the given options that can replace the question mark (?) in the following series.

432, 352, 289, 241, ?

**Options :**

1. ✖ 179

2. ✖ 198

3. ✔ 206

4. ✖ 228

**Question Number : 16 Question Id : 54062620023 Question Type : MCQ Option Shuffling : Yes**

**Is Question Mandatory : No Option Orientation : Vertical**

**Correct Marks : 1 Wrong Marks : 0.33**

Select the option that is related to the third number in the same way as the second number is related to the first number.

15 : 222 :: 20 : ?



**Options :**

- 1. ✖ 257
- 2. ✖ 298
- 3. ✔ 397
- 4. ✖ 408

**Question Number : 17 Question Id : 54062620024 Question Type : MCQ Option Shuffling : Yes**  
**Is Question Mandatory : No Option Orientation : Vertical**

**Correct Marks : 1 Wrong Marks : 0.33**

In a certain code, if '%' means 'addition', '@' means 'multiplication', '\$' means 'division' and '&' means 'subtraction', then find the value of  $182 \$ 7 @ 2 \% 29 \& 7$ .

**Options :**

- 1. ✖ 23
- 2. ✖ 46
- 3. ✔ 74
- 4. ✖ 86

**Question Number : 18 Question Id : 54062620025 Question Type : MCQ Option Shuffling : Yes**  
**Is Question Mandatory : No Option Orientation : Vertical**

**Correct Marks : 1 Wrong Marks : 0.33**

Ravi has Rs. 560 in the denomination of Rs. 5, Rs. 10 and Rs. 20 notes. The number of notes of each denomination is equal. What is the total number of notes that he has?

**Note: For this question, discrepancy is found in question/answer. Full Marks is being awarded to all candidates.**

**Options :**

- 1. 30
- 2. 45

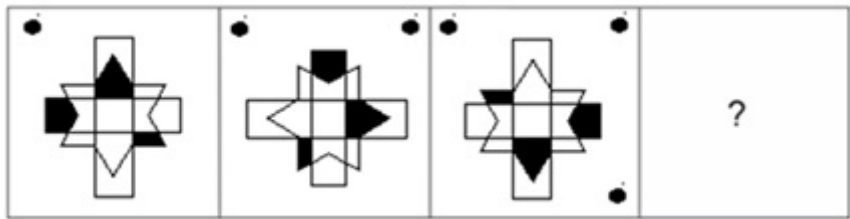
3. 18

4. 54

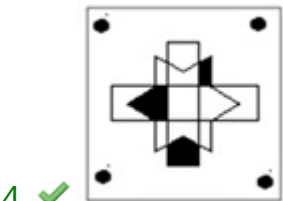
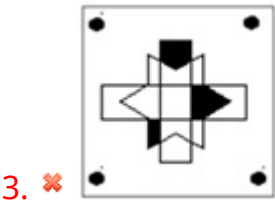
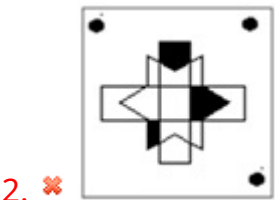
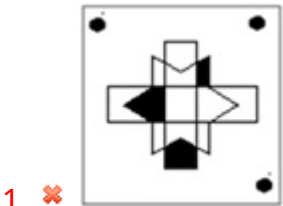
Question Number : 19 Question Id : 54062620026 Question Type : MCQ Option Shuffling : Yes  
Is Question Mandatory : No Option Orientation : Vertical

Correct Marks : 1 Wrong Marks : 0.33

Select the figure from among the given options that can replace the question mark (?) in the following series.



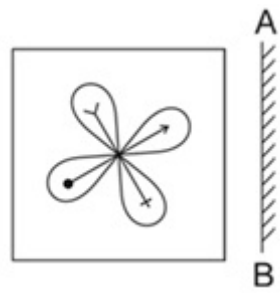
Options :



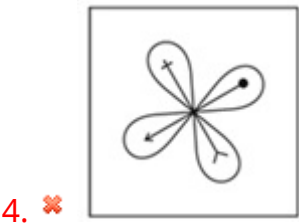
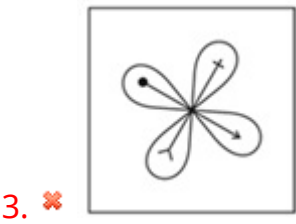
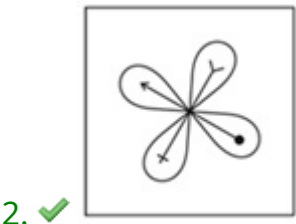

Question Number : 20 Question Id : 54062620027 Question Type : MCQ Option Shuffling : Yes  
Is Question Mandatory : No Option Orientation : Vertical

Correct Marks : 1 Wrong Marks : 0.33

Select the correct mirror image of the given figure when the mirror is placed at AB as shown.



Options :



# Quantitative Aptitude

Section Id :	5406261000
Section Number :	3
Section type :	Online
Mandatory or Optional :	Mandatory
Number of Questions :	20
Number of Questions to be attempted :	20
Section Marks :	20
Enable Mark as Answered Mark for Review and Clear Response :	Yes
Sub-Section Number :	1
Sub-Section Id :	5406261201
Question Shuffling Allowed :	Yes

Question Number : 21 Question Id : 54062620028 Question Type : MCQ Option Shuffling : Yes  
Is Question Mandatory : No Option Orientation : Vertical

Correct Marks : 1 Wrong Marks : 0.33

What number should be subtracted from  $x^3 + 3x^2 - 4x + 8$ , if it is to be perfectly divisible by  $x - 3$ ?

Options :

1. ✖ 52

2. ✖ 38

3. ✖ 45

4. ✔ 50

Question Number : 22 Question Id : 54062620029 Question Type : MCQ Option Shuffling : Yes  
Is Question Mandatory : No Option Orientation : Vertical

**Correct Marks : 1 Wrong Marks : 0.33**

A number when divided by a divisor, leaves a remainder of 32. If two times of the original number is divided by the same divisor, whose remainder is 13, then the value of the divisor is:

**Options :**

1. ✖ 37

2. ✔ 51

3. ✖ 48

4. ✖ 53

**Question Number : 23 Question Id : 54062620030 Question Type : MCQ Option Shuffling : Yes**

**Is Question Mandatory : No Option Orientation : Vertical**

**Correct Marks : 1 Wrong Marks : 0.33**

If the given expression  $[12.548 \times 12.548 + 0.0106 \times x + 0.0106 \times 0.0106]$  is a perfect square, then the value of  $x$  is equal to:

**Options :**

1. ✖ 0.0212

2. ✖ 12.548

3. ✔ 25.096

4. ✖ 6.274

**Question Number : 24 Question Id : 54062620031 Question Type : MCQ Option Shuffling : Yes**

**Is Question Mandatory : No Option Orientation : Vertical**

**Correct Marks : 1 Wrong Marks : 0.33**

Convert the expression  $\frac{0.1667 \times 0.8333 \times 0.6666}{0.4444 \times 1.3333 \times 0.2560}$  into a fraction.

Options :

1. ✖  $\frac{135}{284}$

2. ✔  $\frac{625}{1024}$

3. ✖  $\frac{123}{238}$

4. ✖  $\frac{105}{286}$

Question Number : 25 Question Id : 54062620032 Question Type : MCQ Option Shuffling : Yes  
Is Question Mandatory : No Option Orientation : Vertical

Correct Marks : 1 Wrong Marks : 0.33

Which of the following is the correct ascending order for  $\frac{3}{7}, \frac{7}{11}, \frac{12}{13}, \frac{11}{15}, \frac{13}{15}$ ?

Options :

1. ✖  $\frac{3}{7} < \frac{7}{11} < \frac{13}{15} < \frac{11}{15} < \frac{12}{13}$

2. ✔  $\frac{3}{7} < \frac{7}{11} < \frac{11}{15} < \frac{13}{15} < \frac{12}{13}$

3. ✖  $\frac{3}{7} < \frac{7}{11} < \frac{12}{13} < \frac{13}{15} < \frac{11}{15}$

4. ✖  $\frac{3}{7} < \frac{7}{11} < \frac{12}{13} < \frac{11}{15} < \frac{13}{15}$

Question Number : 26 Question Id : 54062620033 Question Type : MCQ Option Shuffling : Yes  
Is Question Mandatory : No Option Orientation : Vertical

Correct Marks : 1 Wrong Marks : 0.33

Simplify the following equation.

$$\sqrt{[(2639 \div 13) + (6677 \div 11) + 31]} = 3542 - x$$

**Options :**

1. ✖ 3418

2. ✖ 3326

3. ✖ 3282

4. ✔ 3513

**Question Number : 27 Question Id : 54062620034 Question Type : MCQ Option Shuffling : Yes**

**Is Question Mandatory : No Option Orientation : Vertical**

**Correct Marks : 1 Wrong Marks : 0.33**

Simplify the following (correct to two decimal places).

$$(37\% \text{ of } 324) - \{(19\% \text{ of } 172) \times [(32\% \text{ of } 382) \div (18\% \text{ of } 236)]\}$$

Note: For this question, discrepancy is found in question/answer. Full Marks is being awarded to all candidates.

**Options :**

1. 22.62

2. 25.76

3. 28.24

4. 24.36

Question Number : 28 Question Id : 54062620035 Question Type : MCQ Option Shuffling : Yes

Is Question Mandatory : No Option Orientation : Vertical

Correct Marks : 1 Wrong Marks : 0.33

The LCM of the fractions  $\frac{2}{3}, \frac{4}{5}, \frac{8}{9}, \frac{12}{13}, \frac{14}{15}, \frac{28}{33}$  is:

Options :

1. ✓ 168

2. ✗ 56

3. ✗ 124

4. ✗ 108

Question Number : 29 Question Id : 54062620036 Question Type : MCQ Option Shuffling : Yes

Is Question Mandatory : No Option Orientation : Vertical

Correct Marks : 1 Wrong Marks : 0.33

The least number which when divided by 2, 4, 5, 6 and 8, leaves the same remainder 3 in each case. If the same number is divided by 7, it leaves no remainder. The number is:

Note: For this question, discrepancy is found in question/answer. Full Marks is being awarded to all candidates.

Options :

1. 609

2. 483



3. 728

4. 252

**Question Number : 30 Question Id : 54062620037 Question Type : MCQ Option Shuffling : Yes**  
**Is Question Mandatory : No Option Orientation : Vertical**

**Correct Marks : 1 Wrong Marks : 0.33**

The ratio of the expenditure of three family members A, B and C is 17 : 18 : 26, respectively, and their savings are 15%, 25% and 35% of their income, respectively. If the sum of their incomes is ₹ 12,075, then the income of B is:

**Options :**

1. ✖ ₹ 8,625

2. ✔ ₹ 3,450

3. ✖ ₹ 2,875

4. ✖ ₹ 5,750

**Question Number : 31 Question Id : 54062620038 Question Type : MCQ Option Shuffling : Yes**  
**Is Question Mandatory : No Option Orientation : Vertical**

**Correct Marks : 1 Wrong Marks : 0.33**

A total amount of ₹ 52,500 is to be divided among four workers A, B, C and D in such a way that the ratio of the shares of A : B is 1 : 2, B : C is 3 : 1, and C : D is 2 : 3. What is the difference between the shares of A and C?

**Options :**

1. ✖ ₹ 4,250

2. ✖ ₹ 11,250

3. ✔ ₹ 3,750

4. ✖ ₹ 7,500

**Question Number : 32 Question Id : 54062620039 Question Type : MCQ Option Shuffling : Yes**

**Is Question Mandatory : No Option Orientation : Vertical**

**Correct Marks : 1 Wrong Marks : 0.33**

The monthly income of a person was ₹ 21,975 and his monthly expenditure was ₹ 14,650. If his income increased by 18% and expenditure increased by 12%, what is the percentage increase or decrease in savings?

**Options :**

1. ✖ 25% increase

2. ✖ 30% decrease

3. ✔ 30% increase

4. ✖ 25% decrease

**Question Number : 33 Question Id : 54062620040 Question Type : MCQ Option Shuffling : Yes**

**Is Question Mandatory : No Option Orientation : Vertical**

**Correct Marks : 1 Wrong Marks : 0.33**

A sum of ₹ 18,000 was lent partly at 6% and partly at 9% p.a. simple interest. The total interest received after 4 years is ₹ 5,520. The ratio of the money lent at 6% to that lent at 9% is:

**Options :**

1. ✖ 5 : 4

2. ✔ 4 : 5

3. ✖ 3 : 5

4. ✖ 2 : 3

**Question Number : 34 Question Id : 54062620041 Question Type : MCQ Option Shuffling : Yes**  
**Is Question Mandatory : No Option Orientation : Vertical**

**Correct Marks : 1 Wrong Marks : 0.33**

A retailer brought 75 kg of dal at a discount of 20% on the market price. Moreover, he was given 12 kg of dal free of cost by the retailer for purchasing in bulk quantity. If the retailer sold the entire quantity of dal at the marked price to his customers, then what was his profit percentage?

**Options :**

- 1. ✖ 35%
- 2. ✖ 25%
- 3. ✖ 42%
- 4. ✔ 45%

**Question Number : 35 Question Id : 54062620042 Question Type : MCQ Option Shuffling : Yes**  
**Is Question Mandatory : No Option Orientation : Vertical**

**Correct Marks : 1 Wrong Marks : 0.33**

A fruit seller has 30 kg of oranges, some of which he sells at 20% profit and the remaining at 15% loss. In the total transaction, he gets a profit of 15%, What quantity of oranges did he sell at a loss?

**Options :**

- 1. ✖ 12.1 kg
- 2. ✔ 4.3 kg
- 3. ✖ 15.4 kg
- 4. ✖ 10.6 kg

**Question Number : 36 Question Id : 54062620043 Question Type : MCQ Option Shuffling : Yes**

**Is Question Mandatory : No Option Orientation : Vertical**

**Correct Marks : 1 Wrong Marks : 0.33**

A certain quantity of air conditioning units were purchased for ₹ 45 lakhs and  $\frac{1}{3}$  of the units were sold at a loss of 10%.  
At what percentage should the remaining units be sold to make a gain of 20% on the whole transaction?

**Options :**

1. ✓ 35%

2. ✗ 25%

3. ✗ 30%

4. ✗ 38%

**Question Number : 37 Question Id : 54062620044 Question Type : MCQ Option Shuffling : Yes**

**Is Question Mandatory : No Option Orientation : Vertical**

**Correct Marks : 1 Wrong Marks : 0.33**

A school teacher spends ₹ 7.00 for each km when she travels by auto and ₹ 9.00 for each km when she travels by van. If she spent ₹ 310 in one week for traveling 40 km, then how many kilometres did she travel by auto?

**Options :**

1. ✓ 25 km

2. ✗ 28 km

3. ✗ 32 km

4. ✗ 26 km

**Question Number : 38 Question Id : 54062620045 Question Type : MCQ Option Shuffling : Yes**

**Is Question Mandatory : No Option Orientation : Vertical**

**Correct Marks : 1 Wrong Marks : 0.33**

The ratio between the length and the perimeter of a rectangle is 9 : 20. If the area of the rectangle is  $324 \text{ cm}^2$ , then the breadth of the rectangle is:

**Options :**

1. ✖ 5 cm

2. ✖ 7 cm

3. ✖ 8 cm

4. ✔ 6 cm

**Question Number : 39 Question Id : 54062620046 Question Type : MCQ Option Shuffling : Yes**

**Is Question Mandatory : No Option Orientation : Vertical**

**Correct Marks : 1 Wrong Marks : 0.33**

The length of the longest copper pipe for an air conditioning unit that can be placed in a conference hall, 40 m long, 30 m broad and 20 m height, is:

**Options :**

1. ✖  $5\sqrt{29}$  m

2. ✖  $15\sqrt{29}$  m

3. ✔  $10\sqrt{29}$  m

4. ✖  $12\sqrt{29}$  m

**Question Number : 40 Question Id : 54062620047 Question Type : MCQ Option Shuffling : Yes**

**Is Question Mandatory : No Option Orientation : Vertical**

**Correct Marks : 1 Wrong Marks : 0.33**

If a 25 m long and 20 m broad seminar hall is surrounded by a verandah with a uniform width of 2.5 m, then the cost of tile flooring the verandah at ₹ 42.00 per square metre is:

**Options :**

1. ✓ ₹ 10,500

2. ✗ ₹ 12,500

3. ✗ ₹ 9,500

4. ✗ ₹ 11,250

**General English**

Section Id :	5406261001
Section Number :	4
Section type :	Online
Mandatory or Optional :	Mandatory
Number of Questions :	20
Number of Questions to be attempted :	20
Section Marks :	20
Enable Mark as Answered Mark for Review and Clear Response :	Yes
Sub-Section Number :	1
Sub-Section Id :	5406261202
Question Shuffling Allowed :	Yes

**Question Number : 41 Question Id : 54062620048 Question Type : MCQ Option Shuffling : Yes**  
**Is Question Mandatory : No Option Orientation : Vertical**

**Correct Marks : 1 Wrong Marks : 0.33**

Select the most appropriate suffix to fill in the blank.

The doctor advised the mother, "Give him a spoon \_\_\_\_ of this syrup if his temperature increases."

**Options :**

1. ✖ -ish
2. ✔ -ful
3. ✖ -ly
4. ✖ -ih

**Question Number : 42 Question Id : 54062620049 Question Type : MCQ Option Shuffling : Yes**

**Is Question Mandatory : No Option Orientation : Vertical**

**Correct Marks : 1 Wrong Marks : 0.33**

Select the option that can be used as a one-word substitute for the given group of words.

To send a person back to his own country

**Options :**

1. ✖ Immigrate
2. ✖ Emigrate
3. ✖ Migrate
4. ✔ Repatriate

**Question Number : 43 Question Id : 54062620050 Question Type : MCQ Option Shuffling : Yes**

**Is Question Mandatory : No Option Orientation : Vertical**

**Correct Marks : 1 Wrong Marks : 0.33**

Select the most appropriate option to fill in the blank.

My mother complains that I always \_\_\_\_\_ a mess when I cook.

**Options :**

1. ✖ get
2. ✔ make

3. ✖ have

4. ✖ do

**Question Number : 44 Question Id : 54062620051 Question Type : MCQ Option Shuffling : Yes**

**Is Question Mandatory : No Option Orientation : Vertical**

**Correct Marks : 1 Wrong Marks : 0.33**

Select the most appropriate option to fill in the blanks.

Photoreception is activation of a biological \_\_\_\_\_ by light. Most organisms including man \_\_\_\_\_ to light. Some animals react to light waves not \_\_\_\_\_ by man.

**Options :**

1. ✖ procedure; react; used

2. ✖ reaction; address; seen

3. ✖ progression; retort; professed

4. ✔ process; respond; perceived

**Question Number : 45 Question Id : 54062620052 Question Type : MCQ Option Shuffling : Yes**

**Is Question Mandatory : No Option Orientation : Vertical**

**Correct Marks : 1 Wrong Marks : 0.33**

Select the option that can be used as a one-word substitute for the given group of words.

A thing that existed before or logically precedes another

**Options :**

1. ✖ Subsequent

2. ✔ Antecedents

3. ✖ Consequent

4. ✖ Successive

**Question Number : 46 Question Id : 54062620053 Question Type : MCQ Option Shuffling : Yes**

**Is Question Mandatory : No Option Orientation : Vertical**

**Correct Marks : 1 Wrong Marks : 0.33**



Select the most appropriate synonym of the given word.

Condone

**Options :**

1. ✓ Forgive
2. ✗ Remember
3. ✗ Enumerate
4. ✗ Calculate

**Question Number : 47 Question Id : 54062620054 Question Type : MCQ Option Shuffling : Yes**

**Is Question Mandatory : No Option Orientation : Vertical**

**Correct Marks : 1 Wrong Marks : 0.33**

Select the most appropriate synonym of the given word.

Pernicious

**Options :**

1. ✗ Judicious
2. ✗ Visceral
3. ✗ Ingenuous
4. ✓ Detrimental

**Question Number : 48 Question Id : 54062620055 Question Type : MCQ Option Shuffling : Yes**

**Is Question Mandatory : No Option Orientation : Vertical**

**Correct Marks : 1 Wrong Marks : 0.33**

Select the most appropriate synonym of the underlined word.

Experimental work shows that the mortality in animals decreases if the fever is untreated, and that elevated temperatures can enhance certain aspects of the immune response.

**Options :**

1. ✗ demolition
2. ✗ degeneration

3. ✖ subversion

4. ✔ fatality

**Question Number : 49 Question Id : 54062620056 Question Type : MCQ Option Shuffling : Yes**

**Is Question Mandatory : No Option Orientation : Vertical**

**Correct Marks : 1 Wrong Marks : 0.33**

Select the option that can be used as a one-word substitute for the given group of words.

Something that is short-lived; that does not last for a long time

**Options :**

1. ✔ Ephemeral

2. ✖ Eternal

3. ✖ Perpetual

4. ✖ Intermittent

**Question Number : 50 Question Id : 54062620057 Question Type : MCQ Option Shuffling : Yes**

**Is Question Mandatory : No Option Orientation : Vertical**

**Correct Marks : 1 Wrong Marks : 0.33**

Select the option to complete the collocation in the given sentence:

I am going out to get some vegetables for dinner tonight. Will you please \_\_\_\_\_ an eye on the rice cooker?

**Options :**

1. ✖ take

2. ✔ keep

3. ✖ have

4. ✖ make

**Question Number : 51 Question Id : 54062620058 Question Type : MCQ Option Shuffling : Yes**

**Is Question Mandatory : No Option Orientation : Vertical**

**Correct Marks : 1 Wrong Marks : 0.33**

Select the most appropriate ANTONYM of the given word.

Ostentatious

**Options :**

1. ✖ Showy
2. ✖ Fragrant
3. ✔ Modest
4. ✖ Grand

**Question Number : 52 Question Id : 54062620059 Question Type : MCQ Option Shuffling : Yes**

**Is Question Mandatory : No Option Orientation : Vertical**

**Correct Marks : 1 Wrong Marks : 0.33**

Select the most appropriate verb form of the words given in the brackets to fill in the blanks.

When you \_\_\_\_\_ (write) this article, make it more descriptive. That will make it \_\_\_\_\_ (interest) to read.

**Options :**

1. ✖ written; interested
2. ✖ writing; interesting
3. ✖ pre-write; interested
4. ✔ rewrite; interesting

**Question Number : 53 Question Id : 54062620060 Question Type : MCQ Option Shuffling : Yes**

**Is Question Mandatory : No Option Orientation : Vertical**

**Correct Marks : 1 Wrong Marks : 0.33**

Select the most appropriate ANTONYM of the underlined word.

Stimulation of the anterior hypothalamus by excess heat causes sweating.

**Options :**

1. ✖ ulterior
2. ✔ posterior

3. ✖ interior

4. ✖ exterior

**Question Number : 54 Question Id : 54062620061 Question Type : MCQ Option Shuffling : Yes**

**Is Question Mandatory : No Option Orientation : Vertical**

**Correct Marks : 1 Wrong Marks : 0.33**

Which of the following idioms would suit the following situation?

I saw my college friend today. Once, we were best friends but after a misunderstanding we stopped talking. Though it was nice seeing him again, we can never go back to our earlier relationship.

**Options :**

1. ✖ You can't judge a book by its cover

2. ✖ Get out of hand

3. ✖ Back to the drawing board

4. ✔ That ship has sailed

**Question Number : 55 Question Id : 54062620062 Question Type : MCQ Option Shuffling : Yes**

**Is Question Mandatory : No Option Orientation : Vertical**

**Correct Marks : 1 Wrong Marks : 0.33**

Select the most appropriate conjunction to fill in the blank.

\_\_\_\_\_ I was hungry, I did not eat my lunch.

**Options :**

1. ✖ Since

2. ✔ Although

3. ✖ As

4. ✖ But

**Question Number : 56 Question Id : 54062620063 Question Type : MCQ Option Shuffling : Yes**

**Is Question Mandatory : No Option Orientation : Vertical**

**Correct Marks : 1 Wrong Marks : 0.33**

Select the option that will complete the given conditional.

If I had known about the impending crisis, \_\_\_\_\_.

**Options :**

1. ✓ I would have made appropriate arrangements
2. ✗ I will make appropriate arrangements
3. ✗ I would make appropriate arrangements
4. ✗ I wouldn't make appropriate arrangements

**Question Number : 57 Question Id : 54062620064 Question Type : MCQ Option Shuffling : Yes**

**Is Question Mandatory : No Option Orientation : Vertical**

**Correct Marks : 1 Wrong Marks : 0.33**

Select the most appropriate prepositions to fill in the blanks.

Coloured bands \_\_\_\_\_ soap bubbles and oil layers are caused \_\_\_\_\_ interference of light waves \_\_\_\_\_ themselves.

**Options :**

1. ✗ in; on; by
2. ✓ on; by; with
3. ✗ of; to; on
4. ✗ into; in; to

**Question Number : 58 Question Id : 54062620065 Question Type : MCQ Option Shuffling : Yes**

**Is Question Mandatory : No Option Orientation : Vertical**

**Correct Marks : 1 Wrong Marks : 0.33**

Select the grammatically INCORRECT sentence from the given options.

**Options :**

1. ✗ Women's education is the key to a better life in the future.
2. ✗ Children working in hazardous industries are prone to debilitating conditions which can cripple them for life.

3. ✖ Psychologists say that parents who overindulge their kids set them up to be more vulnerable to future anxiety and depression.

4. ✔ Trees provides a home for wild animals they produce many kinds of timber.

**Question Number : 59 Question Id : 54062620066 Question Type : MCQ Option Shuffling : Yes**

**Is Question Mandatory : No Option Orientation : Vertical**

**Correct Marks : 1 Wrong Marks : 0.33**

Select the most appropriate pronouns to fill in the blanks.

Although \_\_\_\_\_ in the classroom was able to understand \_\_\_\_\_ said by the lecturer, no student complained.

**Options :**

1. ✖ anyone; anything

2. ✖ someone; nothing

3. ✖ a few; nothing

4. ✔ no one; anything

**Question Number : 60 Question Id : 54062620067 Question Type : MCQ Option Shuffling : Yes**

**Is Question Mandatory : No Option Orientation : Vertical**

**Correct Marks : 1 Wrong Marks : 0.33**

Select the most appropriate option to fill in the blanks.

Vidya \_\_\_\_\_ for Netherlands for her higher studies last month itself. She must \_\_\_\_\_ her university by this time.

**Options :**

1. ✖ had left; joined

2. ✔ left; have joined

3. ✖ has left; have joined

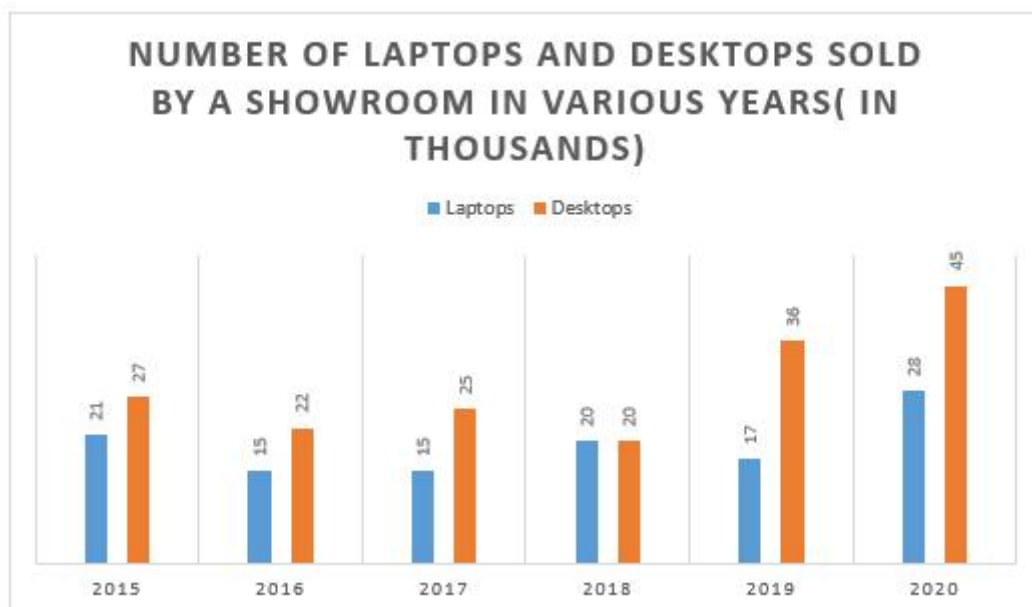
4. ✖ leaves; joins

# Data Analysis Data Interpretation & Data Sufficiency

Section Id :	5406261002
Section Number :	5
Section type :	Online
Mandatory or Optional :	Mandatory
Number of Questions :	5
Number of Questions to be attempted :	5
Section Marks :	5
Enable Mark as Answered Mark for Review and Clear Response :	Yes
Sub-Section Number :	1
Sub-Section Id :	5406261203
Question Shuffling Allowed :	Yes

**Question Number : 61 Question Id : 54062620068 Question Type : MCQ Option Shuffling : Yes**  
**Is Question Mandatory : No Option Orientation : Vertical**  
**Correct Marks : 1 Wrong Marks : 0.33**

The following bar graph gives a detailed picture of the number of laptops and desktops sold by a showroom in various years from 2015 to 2020 (In thousands).



What is the difference between the percentage increase in the number of desktops sold in the year 2019 and the number of laptops sold in the year 2018?

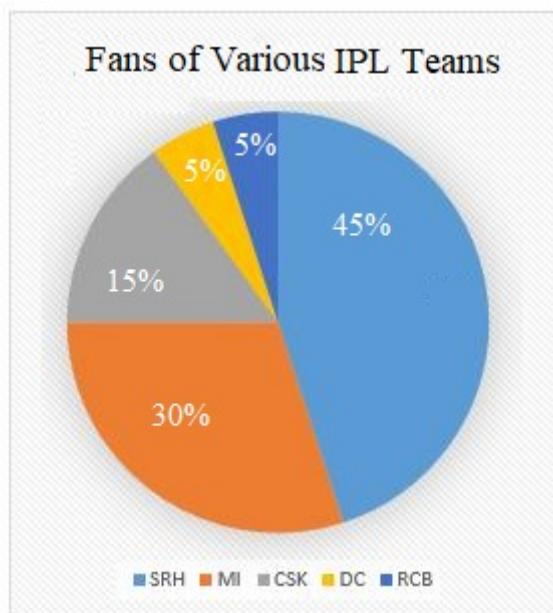
**Options :**

- 1. ✓ 46.67 percent
- 2. ✗ 53.25 percent
- 3. ✗ 75.65 percent
- 4. ✗ 35.68 percent

**Question Number : 62 Question Id : 54062620069 Question Type : MCQ Option Shuffling : Yes Is Question Mandatory : No Option Orientation : Vertical**

**Correct Marks : 1 Wrong Marks : 0.33**

The following chart gives information regarding the percentage distribution of fans of various IPL teams among a colony.



If the total number of residents in the colony is 6000, then what is the ratio of the number of fans of SRH and the number of fans of CSK?

**Options :**

- 1. ✗ 1 : 3
- 2. ✗ 2 : 4
- 3. ✓ 3 : 1
- 4. ✗ 4 : 2



**Question Number : 63 Question Id : 54062620070 Question Type : MCQ Option Shuffling : Yes**  
**Is Question Mandatory : No Option Orientation : Vertical**  
**Correct Marks : 1 Wrong Marks : 0.33**

The following chart gives information related to the number of various drinks sold by 5 shopkeepers A, B, C, D, E.



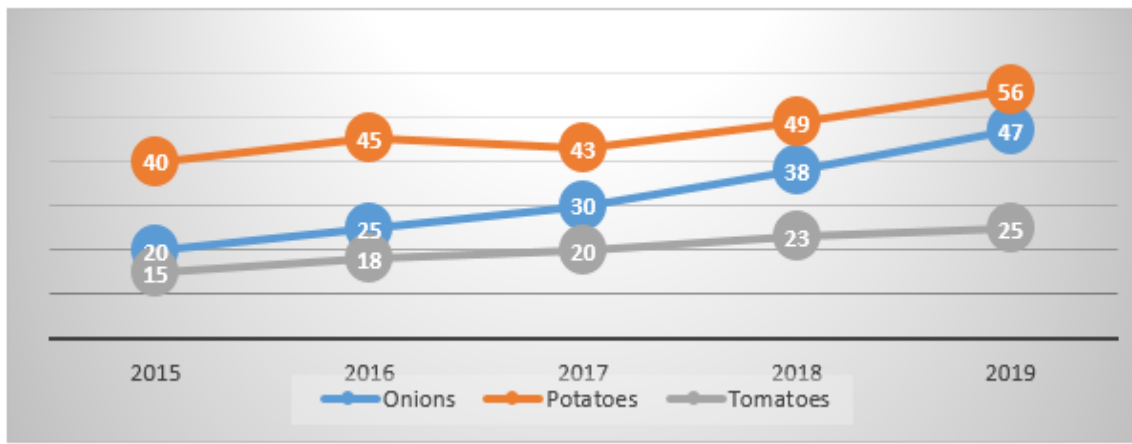
What is the sum of the average number of Pepsis and Mirindas sold by the 5 shopkeepers?

**Options :**

- 1. ✖ 720
- 2. ✖ 700
- 3. ✔ 730
- 4. ✖ 750

**Question Number : 64 Question Id : 54062620071 Question Type : MCQ Option Shuffling : Yes**  
**Is Question Mandatory : No Option Orientation : Vertical**  
**Correct Marks : 1 Wrong Marks : 0.33**

The following line graph shows the prices of 3 vegetables Onions, Potatoes and Tomatoes from 2015 to 2019.



What is the percentage increase in the price of Potatoes from the year 2016 to 2019?

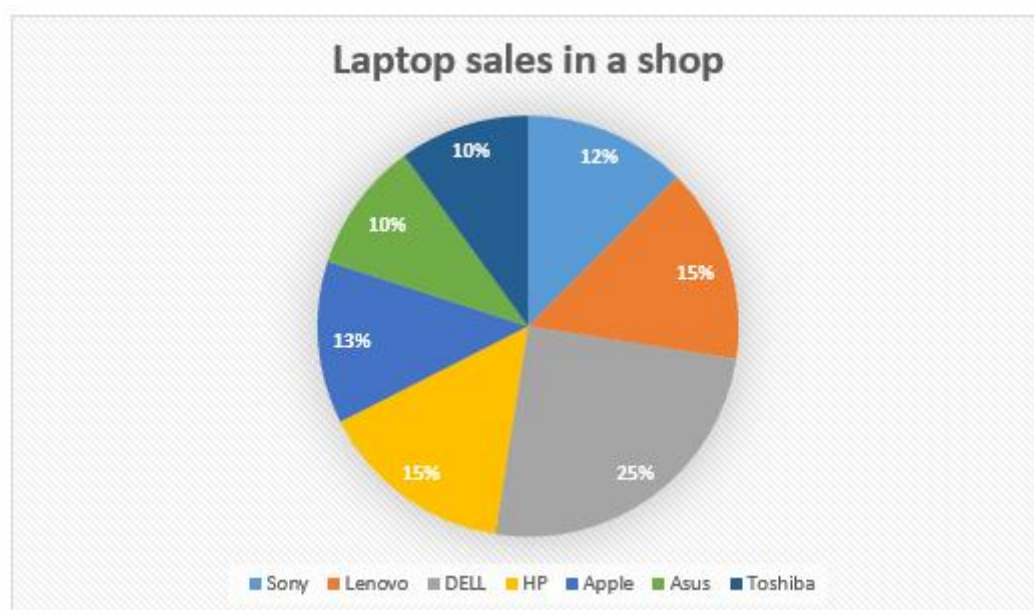
**Options :**

1. ✖ 16.47 percent
2. ✔ 24.44 percent
3. ✖ 29 percent
4. ✖ 20 percent

**Question Number : 65 Question Id : 54062620072 Question Type : MCQ Option Shuffling : Yes Is Question Mandatory : No Option Orientation : Vertical**

**Correct Marks : 1 Wrong Marks : 0.33**

The following pie chart gives a detailed study about the laptop sales in a shop in the month of May.



If the total number of laptops that are sold in May is 700, then what is the sum of the number of Asus and Dell laptops sold?

**Options :**

- 1. ✖ 255
- 2. ✖ 235
- 3. ✖ 225
- 4. ✔ 245

## Computer Proficiency (MS-Office)

Section Id :	5406261003
Section Number :	6
Section type :	Online
Mandatory or Optional :	Mandatory
Number of Questions :	20
Number of Questions to be attempted :	20
Section Marks :	20
Enable Mark as Answered Mark for Review and Clear Response :	Yes
Sub-Section Number :	1
Sub-Section Id :	5406261204
Question Shuffling Allowed :	Yes

**Question Number : 66 Question Id : 54062620073 Question Type : MCQ Option Shuffling : Yes**  
**Is Question Mandatory : No Option Orientation : Vertical**  
**Correct Marks : 1 Wrong Marks : 0.33**

Which of the following is a piece of text or an image in an electronic document that can connect readers to another portion of the document or a different webpage, when using MS-Word 2016?

**Options :**

- 1. ✖ Cross-reference

2. ✖ Mail Merge
3. ✔ Hyperlink
4. ✖ Macros

**Question Number : 67 Question Id : 54062620074 Question Type : MCQ Option Shuffling : Yes**  
**Is Question Mandatory : No Option Orientation : Vertical**  
**Correct Marks : 1 Wrong Marks : 0.33**

Which of the following options of MS-Word 2010 sends a document directly to the default printer without making changes?

**Options :**

1. ✖ Print
2. ✔ Quick Print
3. ✖ Print Preview
4. ✖ Fast Print

**Question Number : 68 Question Id : 54062620075 Question Type : MCQ Option Shuffling : Yes**  
**Is Question Mandatory : No Option Orientation : Vertical**  
**Correct Marks : 1 Wrong Marks : 0.33**

Which of the following change case commands is NOT available in the Font group of the home tab in MS-Word 2016?

**Options :**

1. ✖ Lower case
2. ✖ Upper case
3. ✖ Toggle case
4. ✔ Paragraph case

**Question Number : 69 Question Id : 54062620076 Question Type : MCQ Option Shuffling : Yes**  
**Is Question Mandatory : No Option Orientation : Vertical**  
**Correct Marks : 1 Wrong Marks : 0.33**

Which of the following commands of the Illustrations group in the Insert tab is used to insert

drawings, movies, sounds or stock photography to demonstrate a specific concept in MS-Word 2007?

**Options :**

1. ✓ Clip Art
2. ✗ Picture
3. ✗ Shapes
4. ✗ SmartArt

**Question Number : 70 Question Id : 54062620077 Question Type : MCQ Option Shuffling : Yes**  
**Is Question Mandatory : No Option Orientation : Vertical**

**Correct Marks : 1 Wrong Marks : 0.33**

Which of the following options of the Format tab that appears with Drawing Tools is used to fill a selected shape with solid color, gradient, picture or texture in MS-Word 2016?

**Options :**

1. ✗ Shadow Effects
2. ✗ 3-D Effects
3. ✗ Shape Styles
4. ✓ Shape Fill

**Question Number : 71 Question Id : 54062620078 Question Type : MCQ Option Shuffling : Yes**  
**Is Question Mandatory : No Option Orientation : Vertical**

**Correct Marks : 1 Wrong Marks : 0.33**

Which of the following options from the Page Setup group in the Layout tab is used to switch the pages between landscape and portrait layouts in MS-Word 2016?

**Options :**

1. ✗ Margins
2. ✓ Orientation
3. ✗ Hyphenation
4. ✗ Watermark

**Question Number : 72 Question Id : 54062620079 Question Type : MCQ Option Shuffling : Yes**

**Is Question Mandatory : No Option Orientation : Vertical**

**Correct Marks : 1 Wrong Marks : 0.33**

Which of the following tabs of MS-Excel 2016 contains features such as adding external data (from the web), filtering options and data tools etc.?

**Options :**

1. ✖ Home
2. ✖ Formulas
3. ✔ Data
4. ✖ Review

**Question Number : 73 Question Id : 54062620080 Question Type : MCQ Option Shuffling : Yes**

**Is Question Mandatory : No Option Orientation : Vertical**

**Correct Marks : 1 Wrong Marks : 0.33**

Which of the following statements is FALSE with reference to MS-Excel 2016?

**Options :**

1. ✔ The sheet on which you work is called a 'document'.
2. ✖ Multiple worksheets can be added in a single Excel file.
3. ✖ MS-Excel is also a data processing application.
4. ✖ An MS-Excel file is saved with the extension '.xlsx'.

**Question Number : 74 Question Id : 54062620081 Question Type : MCQ Option Shuffling : Yes**

**Is Question Mandatory : No Option Orientation : Vertical**

**Correct Marks : 1 Wrong Marks : 0.33**

Which of the following shortcut keys in MS-Excel 2013 is used to close a workbook?

**Options :**

1. ✖ Alt+W
2. ✖ Alt+H
3. ✖ Ctrl+S
4. ✔ Ctrl+W

**Question Number : 75 Question Id : 54062620082 Question Type : MCQ Option Shuffling : Yes**  
**Is Question Mandatory : No Option Orientation : Vertical**

**Correct Marks : 1 Wrong Marks : 0.33**

In MS-Excel 2016, 'Ctrl+O' is used \_\_\_\_\_.

**Options :**

1. ✔ to open a workbook
2. ✖ to close a workbook
3. ✖ to save a workbook
4. ✖ to remove all contents

**Question Number : 76 Question Id : 54062620083 Question Type : MCQ Option Shuffling : Yes**  
**Is Question Mandatory : No Option Orientation : Vertical**

**Correct Marks : 1 Wrong Marks : 0.33**

Which of the following displays both, the name of the application and the name of the spreadsheet in MS-Excel 2007?

**Options :**

1. ✖ Menu bar
2. ✔ Title bar
3. ✖ Tool bar
4. ✖ Task bar

**Question Number : 77 Question Id : 54062620084 Question Type : MCQ Option Shuffling : Yes**  
**Is Question Mandatory : No Option Orientation : Vertical**

**Correct Marks : 1 Wrong Marks : 0.33**

Which of the following statements is true with reference to MS-Excel 2016?

**Options :**

1. ✖ The status bar is used to access various commands in Excel.
2. ✖ MS-Excel is a powerful database program.
3. ✖ Ctrl+S is used to open the Print dialogue window

4. ✓ The Chart command is available in the Insert tab

**Question Number : 78 Question Id : 54062620085 Question Type : MCQ Option Shuffling : Yes**

**Is Question Mandatory : No Option Orientation : Vertical**

**Correct Marks : 1 Wrong Marks : 0.33**

In which of the following menus are the Page setup options usually available in MS-Excel 2013?

**Options :**

1. ✗ Insert
2. ✗ Home
3. ✓ Page Layout
4. ✗ Review

**Question Number : 79 Question Id : 54062620086 Question Type : MCQ Option Shuffling : Yes**

**Is Question Mandatory : No Option Orientation : Vertical**

**Correct Marks : 1 Wrong Marks : 0.33**

Pie charts are used to display which of the following in MS-Excel 2016?

**Options :**

1. ✗ Comparing multiple values
2. ✗ Displaying trends over time
3. ✗ Comparing values across categories
4. ✓ The contribution of each value to the total

**Question Number : 80 Question Id : 54062620087 Question Type : MCQ Option Shuffling : Yes**

**Is Question Mandatory : No Option Orientation : Vertical**

**Correct Marks : 1 Wrong Marks : 0.33**

Which of the following is the file extension for an MS-PowerPoint 2016 file?

**Options :**

1. ✗ .PPT
2. ✓ .PPTX
3. ✗ .PTX



4. ✖ .PDF

**Question Number : 81 Question Id : 54062620088 Question Type : MCQ Option Shuffling : Yes**  
**Is Question Mandatory : No Option Orientation : Vertical**

**Correct Marks : 1 Wrong Marks : 0.33**

Which of the following shortcut keys is used to create a new presentation in MS-PowerPoint 2016?

**Options :**

1. ✖ Ctrl+M

2. ✖ Ctrl+B

3. ✔ Ctrl+N

4. ✖ Ctrl+X

**Question Number : 82 Question Id : 54062620089 Question Type : MCQ Option Shuffling : Yes**  
**Is Question Mandatory : No Option Orientation : Vertical**

**Correct Marks : 1 Wrong Marks : 0.33**

Which of the following views of MS-PowerPoint 2013 is used to edit the speaker notes as they will look when we print them out?

**Options :**

1. ✖ Slide Show

2. ✖ Slide Master

3. ✖ Slide Sorter

4. ✔ Notes Page

**Question Number : 83 Question Id : 54062620090 Question Type : MCQ Option Shuffling : Yes**  
**Is Question Mandatory : No Option Orientation : Vertical**

**Correct Marks : 1 Wrong Marks : 0.33**

Which of the following in MS-PowerPoint 2016 allows access to common commands no matter which tab is selected?

**Options :**

1. ✖ Quick Print

2. ✓ Quick Access Toolbar
3. ✗ Dialog Box Launcher
4. ✗ Ruler

**Question Number : 84 Question Id : 54062620091 Question Type : MCQ Option Shuffling : Yes**  
**Is Question Mandatory : No Option Orientation : Vertical**  
**Correct Marks : 1 Wrong Marks : 0.33**

The 'Fly In' option belongs to which of the following Add Effect categories in Custom Animation in MS-PowerPoint 2016?

**Options :**

1. ✓ Entrance
2. ✗ Emphasis
3. ✗ Exit
4. ✗ Motion paths

**Question Number : 85 Question Id : 54062620092 Question Type : MCQ Option Shuffling : Yes**  
**Is Question Mandatory : No Option Orientation : Vertical**  
**Correct Marks : 1 Wrong Marks : 0.33**

The Themes group is found in which of the following tabs in MS-PowerPoint 2016?

**Options :**

1. ✗ Slide show
2. ✗ Animation
3. ✓ Design
4. ✗ Review